



גדול, קטן, שווה

כתבו כמה דגים בכל קערה. השוו את מספר הדגים בכל צנצנת וסמנו את היחס המתאים: גדול (>), קטן (<) או שווה (=)


1.




—




2.




—




3.



—



4.



—

